

# **MENIIT**

**NEET | IIT-JEE | FOUNDATION**

**Corporate Office:** 44-A/1, Kalu Sarai, New Delhi 110016 | **Web:** [www.meniit.com](http://www.meniit.com)

## **JEE MAIN-2020**

### **COMPUTER BASED TEST (CBT)**

**DATE : 04-09-2020 (SHIFT-1) | TIME : (9.00 am to 12.00 pm)**

**Duration 3 Hours | Max. Marks : 300**

**QUESTION  
&  
SOLUTIONS**

## PART-A : PHYSICS

### SECTION – 1 : (Maximum Marks : 80)

#### Single Choice Type

This section contains 20 Single choice questions. Each question has 4 choices (1), (2), (3) and (4) for its answer, out of which Only One is correct.

**Full Marks : +4** If ONLY the correct option is chosen.

**Negative Marks : -1 (minus one) mark** will be deducted for indicating incorrect response.

1. A small bar magnet is placed with its axis at  $30^\circ$  with an external magnetic field of 0.06 T experiences a torque of 0.018 Nm. The minimum work required to rotate it from its stable to unstable equilibrium position is:

(1)  $9.2 \times 10^{-3}$  J                      (2)  $11.7 \times 10^{-3}$  J                      (3)  $6.4 \times 10^{-2}$  J                      (4)  $7.2 \times 10^{-2}$  J

**Ans.** (4)

**Sol.**  $\tau = MB\sin\theta = 0.18$

$$M = \frac{0.018}{B\sin\theta} = \frac{0.018}{0.06 \times 0.5} = 0.6A - m^2$$

$$\begin{aligned} \omega = \Delta U &= U_f - U_i \\ &= -MB\cos 180^\circ - (-MB\cos 0^\circ) \\ &= 2MB \\ &= 2 \times 0.6 \times 0.06 \\ &= 0.072 \text{ J} \end{aligned}$$

2. On the x-axis and at a distance x from the origin, the gravitational field due to a mass distribution is given by  $\frac{Ax}{(x^2 + a^2)^{3/2}}$  in the x-direction. The magnitude of the gravitational potential on the x-axis at a distance x, taking its value to be zero at infinity is:

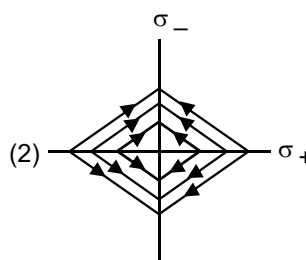
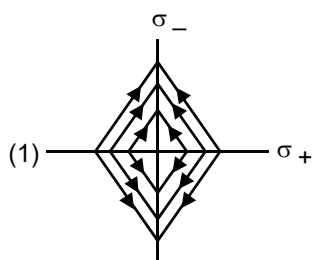
(1)  $\frac{A}{(x^2 + a^2)^{3/2}}$                       (2)  $A(x^2 + a^2)^{3/2}$                       (3)  $A(x^2 + a^2)^{1/2}$                       (4)  $\frac{A}{(x^2 + a^2)^{1/2}}$

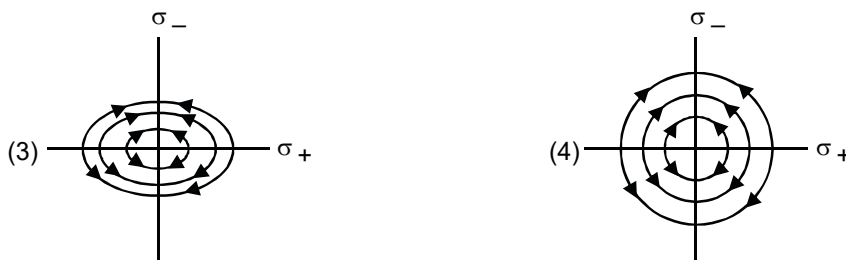
**Ans.** (4)

**Sol.**  $V_x = \int_{\infty}^x \frac{Ax}{(x^2 + a^2)^{3/2}} (-dx)$

$$V_x = -\frac{A}{\sqrt{A^2 + x^2}}$$

3. Two charged thin infinite plane sheets of uniform charge density  $\sigma_+$  and  $\sigma_-$ , where  $|\sigma_+| > |\sigma_-|$ , intersect at the right angle. Which of the following best represents the electric field lines for the system:





Ans. (2)

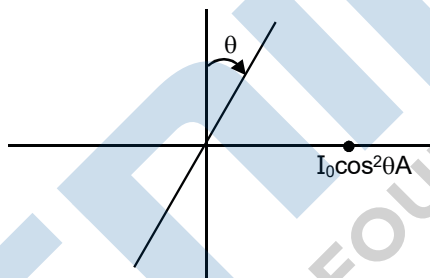
Sol. The electric field intensity due to each uniformly charged infinite plane is uniform. The electric field intensity at points A, B, C and D due to plane 1, plane 2 and both planes are given by  $E_1$ ,  $E_2$  and  $E$  as shown in figure 1. Hence the electric lines of forces are as given in figure 2.

4. A beam of plane polarised light of large cross-sectional area and uniform intensity of  $3.3 \text{ Wm}^{-2}$  falls normally on a polariser (cross sectional area  $3 \times 10^{-4} \text{ m}^2$ ) which rotates about its axis with an angular speed of  $31.4 \text{ rad/s}$ . The energy of light passing through the polariser per revolution, is close to:

- (1)  $1.0 \times 10^{-4} \text{ J}$
- (2)  $5.0 \times 10^{-4} \text{ J}$
- (3)  $1.0 \times 10^{-5} \text{ J}$
- (4)  $1.5 \times 10^{-4} \text{ J}$

Ans. (1)

Sol.



$$\begin{aligned} \text{Average energy} &= I_0 A \langle \cos^2 \theta \rangle \\ &= \frac{3.3 \times 3 \times 10^{-4}}{2} = \frac{9.9}{2} \times 10^{-4} = 4.95 \times 10^{-4} \end{aligned}$$

5. Choose the correct option relating wavelengths of different parts of electromagnetic wave spectrum:

- (1)  $\lambda_{\text{radio waves}} > \lambda_{\text{micro waves}} > \lambda_{\text{visible}} > \lambda_{\text{x-rays}}$
- (2)  $\lambda_{\text{visible}} < \lambda_{\text{micro waves}} < \lambda_{\text{radio waves}} < \lambda_{\text{x-rays}}$
- (3)  $\lambda_{\text{visible}} > \lambda_{\text{x-rays}} > \lambda_{\text{radio waves}} > \lambda_{\text{micro waves}}$
- (4)  $\lambda_{\text{x-rays}} < \lambda_{\text{micro waves}} < \lambda_{\text{radio waves}} < \lambda_{\text{visible}}$

Ans. (1)


Sol. Theory based

6. Blocks of masses  $m$ ,  $2m$ ,  $4m$  and  $8m$  are arranged in a line of a frictionless floor. Another block of mass  $m$ , moving with speed  $v$  along the same line (see figure) collides with mass  $m$  in perfectly inelastic manner. All the subsequent collisions are also perfectly inelastic. At the time the last block of mass  $8m$  starts moving the total energy loss is  $p\%$  of the original energy. Value of 'p' is close to :



- (1) 87
- (2) 37
- (3) 77
- (4) 94

Ans. (4)



Inelastic collision

$$mv = 16mv^1$$

$$v^1 = \frac{v}{16}$$

$$\begin{aligned} \Delta K \text{ loss} &= \frac{1}{2}mv^2 - \frac{1}{2}(16M)\left(\frac{v}{16}\right)^2 \\ &= \frac{1}{2}mv^2 - \frac{1}{2}M\frac{v^2}{16} \\ &= \frac{1}{2}mv^2\left(\frac{15}{16}\right) \end{aligned}$$

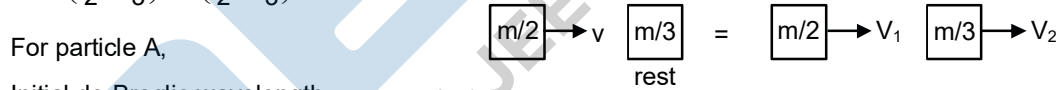
$$\% \Delta K \text{ loss} = \frac{\frac{1}{2}mv^2\left(\frac{15}{16}\right)}{\frac{1}{2}MV^2} \times 100 = \frac{15}{16} \times 100 = 93.75\%$$

7. A particle of mass  $m_A = m/2$  moving along the x-axis with velocity  $v_0$  collides elastically with another particle B at rest having mass  $m_B = m/e$ . If both the particles move along the x-axis after the collision, the change  $\Delta\lambda$  in the wavelength of the particle A, in terms of its de-Broglie wavelength ( $\lambda_0$ ) before the collision is :

- (1)  $\Delta\lambda = 2\lambda_0$       (2)  $\Delta\lambda = 4\lambda_0$       (3)  $\Delta\lambda = \frac{3}{2}\lambda_0$       (4)  $\Delta\lambda = \frac{5}{2}\lambda_0$

Ans. (2)

Sol. 
$$v_1 = \frac{2(m/3)0 + \left(\frac{m}{2} - \frac{m}{3}\right)v}{\left(\frac{m}{2} + \frac{m}{3}\right)} = \frac{v}{5}$$



For particle A, Initial de-Broglie wavelength

$$\lambda_0 = \frac{h}{\frac{m}{2}v} = \frac{2h}{mv}$$

Final de-Broglie wavelength after collision.

$$\lambda_1 = \frac{h}{\frac{m}{2} \frac{v}{5}} = \frac{10h}{mv} = 5\lambda_0$$

Change in De-Broglie wavelength  $\Delta\lambda = \lambda_1 - \lambda_0 = 4\lambda_0$

8. A battery of 3.0 V is connected to a resistor dissipating 0.5 W of power. If the terminal voltage of the battery is 2.5 V, the power dissipated within the internal resistance is :

- (1) 0.125 W      (2) 0.50 W      (3) 0.10 W      (4) 0.072 W

Ans. (3)

**Sol.**  $E = 3V$   
 $V_R = 2.5V$   
 By KVL  
 $V_r + V_R = E$   
 $V_r + 2.5 = 3$   
 $V_r = 0.5$   
 $\frac{V_R}{V_r} = \frac{IR}{I_r} = \frac{2.5}{0.5} = 5 \dots\dots(1)$

$$\frac{R}{r} = 5$$

$$\frac{P_R}{P_r} = \frac{I^2R}{I^2r} = \frac{R}{r}$$

$$\frac{P_R}{P_r} = 5$$

$$P_r = \frac{P_R}{5} = \frac{0.5}{5} = 0.1 \text{ watt}$$

9. The specific heat of water =  $4200 \text{ J}\cdot\text{kg}^{-1} \text{ K}^{-1}$  and the latent heat of ice =  $3.4 \times 10^5 \text{ J}\cdot\text{kg}^{-1}$ . 100 grams of ice at  $0^\circ\text{C}$  is placed in 200 g of water at  $25^\circ\text{C}$ . The amount of ice that will melt as the temperature of water reaches  $0^\circ\text{C}$  is close to (in grams)

- (1) 61.7                                      (2) 69.3                                      (3) 64.6                                      (4) 63.8

**Ans.** (1)

**Sol.**  $MS\Delta T = M\ell$

$$\frac{200}{1000} \times 4200 \times 25 = m \times 340 \times 10^3$$

$$m = 61.7$$

10. Match the  $C_p/C_v$  ratio for ideal gases with different type of molecules:

| Molecule Type                                      | $C_p / C_v$  |
|--|--|
| (A) Monoatomic                                     | (I) 7/5  |
| (B) Diatomic rigid molecules                       | (II) 9/7   |
| (C) Diatomic non-rigid molecules                   | (III) 4/3  |
| (D) Triatomic rigid molecules                      | (IV) 5/3   |
| (1) (A) – (III), (B) – (IV), (C) – (II), (D) – (I) | (2) (A) – (IV), (B) – (I), (C) – (II), (D) – (III) |
| (3) (A) – (IV), (B) – (II), (C) – (I), (D) – (III) | (4) (A) – (II), (B) – (III), (C) – (I), (D) – (IV) |

**Ans.** (2)

**Sol.**  $\gamma = 1 + 2/f$

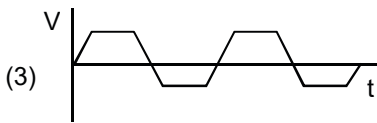
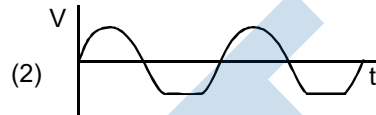
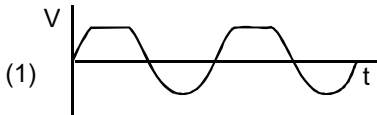
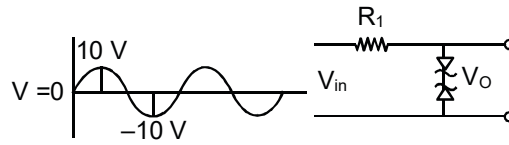
For A ;  $f = 3$  ;                                       $\gamma = 1 + \frac{2}{3} = \frac{5}{3}$

For B ;  $f = 5$  ;                                       $\gamma = 1 + \frac{2}{5} = \frac{7}{5}$

For C ;  $f = 7$  ;  $\gamma = 1 + \frac{2}{7} = \frac{9}{7}$

For D ;  $f = 6$  ;  $\gamma = 1 + \frac{2}{6} = \frac{4}{3}$

11. Take the breakdown voltage of the zener diode used in the given circuit as 6V. For the input voltage shown in the figure below, the time variation of the output voltage is : (Graphs drawn are schematic and not to the scale)



Ans. (3)

Sol. Based on Theory

12. A air bubble of radius 1 cm in water has an upward acceleration of  $9.8 \text{ cm/s}^2$ . The density of water is  $1 \text{ gm cm}^{-3}$  and water offers negligible drag force on the bubble. The mass of the bubble is ( $g = 980 \text{ cm/s}^2$ ).

- (1) 4.15 gm                      (2) 1.52 gm                      (3) 4.51 gm                      (4) 3.15 gm

Ans. (1)

Sol.  $F_b - mg = ma$

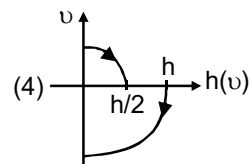
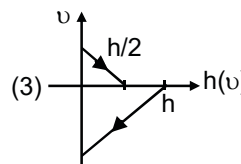
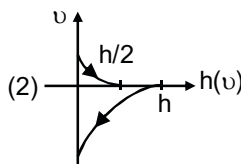
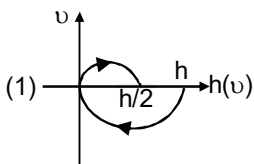
$$F_b = m(g + a)$$

$$= \frac{4}{3} \pi r^3 \rho g = m(g + a)$$

$$m = \frac{4}{3} \pi (1)^3 g = m(980 + 9.8)$$

$$m = 4.15$$

13. A tennis ball is released from a height  $h$  and after freely on a wooden floor it rebounds and reaches height  $h/2$ . The velocity versus height of the ball during its motion may be represented graphically by : (graphs are drawn schematically and on not to scale)



Ans. (4)

Sol. (i) For uniformly accelerated / deaccelerated motion

$$v^2 = u^2 \pm 2gh$$

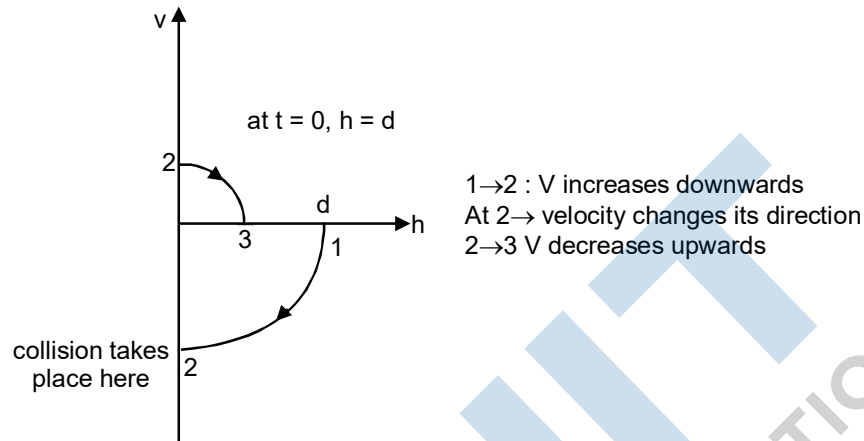
i.e. v-h graph will be a parabola (because equation is quadratic).

(ii) Initially velocity is downwards (-ve) and then after collision it reverses its direction with lesser magnitude. i.e. velocity is upwards (+ve). Graph (A) satisfies both these conditions.

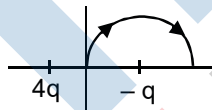
Therefore, correct answer is (A)

Note that time  $t = 0$  corresponds to the point on the graph where  $h = d$

Next time collision takes place at 3.



14. A two point charges  $4q$  and  $-q$  are fixed on the x-axis at  $x = -d/2$  and  $x = d/2$ , respectively. If the third point charge ' $q$ ' is taken from the origin to  $x = d$  along the semicircle as shown in the figure, the energy of the charge will :



(1) Increase by  $\frac{2q^2}{3\pi \epsilon_0 d}$

(2) Increase by  $\frac{2q^2}{4\pi \epsilon_0 d}$

(3) decrease by  $\frac{q^2}{4\pi \epsilon_0 d}$

(4) decrease by  $\frac{4q^2}{3\pi \epsilon_0 d}$

Ans. (4)

Sol. Potential at O,

$$\Rightarrow V_o = \frac{K4q}{\frac{d}{2}} + \frac{K(-q)}{\frac{d}{2}} = \frac{6Kq}{d}$$

Potential at P,

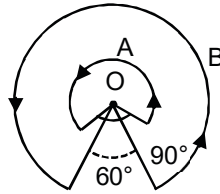
$$\Rightarrow V_p = \frac{K4q}{\frac{3d}{2}} + \frac{K(-q)}{\frac{d}{2}} = \frac{2Kq}{3d}$$

Change in potential energy of a charge  $q = q\Delta V = q(V_f - V_i)$

$$= q(V_p - V_o)$$

$$q\left(\frac{2Kq}{3d} - \frac{6Kq}{d}\right) = \frac{16q^2}{4\pi\epsilon_0 3d} = \frac{4q^2}{3\pi\epsilon_0 d}$$

15. A wire A, bent in the shape of an arc of a circle, carrying a current of 2A and having radius 2 cm and another wire B, also bent in the shape of an arc of a circle, carrying a current of 3A and having radius 4 cm, are placed as shown in the figure. The ratio of the magnetic fields due to the wires A and B at the common centre O is :



- (1) 6 : 5                      (2) 6 : 4                      (3) 2 : 5                      (4) 4 : 6

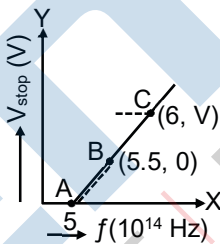
Ans. (1)

Sol.  $B_c = \frac{\mu_0 I}{4\pi R}(\theta)$  ( $\theta$  angle substance at centre)

$$\frac{B_{\text{large}}}{B_{\text{small}}} = \frac{i_1}{i_2} \times \frac{R_2(2\pi - \pi/2)}{R_1(2\pi - \pi/3)}$$

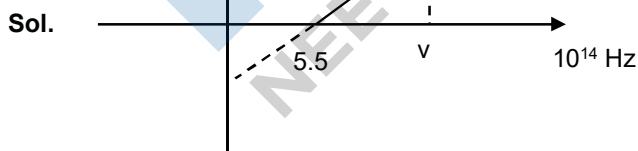
$$= \frac{2}{2} \times \frac{2}{3} \times \frac{3\pi}{2} \times \frac{3}{5\pi} = \frac{6}{5}$$

16. Given figure shows few data points in a photo-electric effect experiment for a certain metal. The minimum energy for ejection of electrons from its surface is : (Planck's constant  $h = 6.62 \times 10^{-34}$  J-s)



- (1) 2.10 eV                      (2) 2.59 eV                      (3) 1.93 eV                      (4) 2.27 eV

Ans. (4)



Threshold Energy =  $h\nu$

$$= 6.62 \times 10^{-34} \times 5.5 \times 10^{14} \text{ J}$$

$$\text{Work friction} = \frac{6.62 \times 5.5 \times 10^{-20}}{1.6 \times 10^{-19}} \text{ eV} = 2.27 \text{ eV}$$



17. For a transvers wave travelling, along a straight line, the distance between two peaks (crests) is 5m, while the distance between one crest and one trough is 1 : 5 m. The possible wavelengths (in m) of the waves are :

- (1) 1, 3, 5                      (2)  $\frac{1}{2}, \frac{1}{4}, \frac{1}{6}, \dots$                       (3)  $\frac{1}{1}, \frac{1}{3}, \frac{1}{5}, \dots$                       (4) 1, 2, 3, .....

Ans. (3)

Sol. Trough to crest distance

$$1.5 = (2n_1 + 1)\frac{\lambda}{2} \quad \dots(1)$$

Trough to trough distance

$$5 = (n_2\lambda) \quad \dots(2)$$

from (1) and (2)

$$\frac{1.5}{5} = \frac{2n_1 + 1}{2(n_2)}$$

$$3n_2 = 10n_1 + 5$$

$n_1$  and  $n_2$  are integer

$$(1) n_1 = 1, n_2 = 5, \lambda = 1$$

$$(2) n_1 = 4, n_2 = 15, \lambda = 1/3$$

$$(3) n_1 = 7, n_2 = 25, \lambda = 1/5$$

18. Standing from the origin at time  $t = 0$ , with initial velocity  $5\hat{j}\text{ms}^{-1}$ , a particle moves in the x-y plane with a constant acceleration of  $(10\hat{i} + 4\hat{j})\text{ms}^{-2}$ . At time t, its coordinates are  $(20\text{m}, y_0\text{m})$ . The values of t and  $y_0$  are, respectively :

- (1) 4s and 52 m                      (2) 2s and 24 m                      (3) 2s and 18 m                      (4) 5s and 25 m

Ans. (3)

Sol. Equation (1)

$$S_x = \frac{1}{2}a_x t^2$$

$$20 = \frac{1}{2} \times 10 \times t^2$$

$$t = 2$$

Equation (2)

$$S_y = u_y t + \frac{1}{2}a_y t^2$$

$$y = 5(2) + \frac{1}{2}(4)(2)^2$$

$$y = 18$$

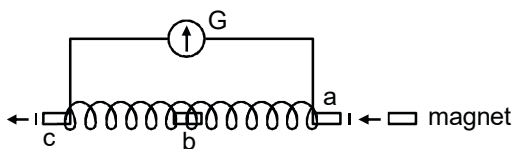
19. Dimensional formula for thermal conductivity is (here K denotes the temperature) :

- (1)  $\text{MLT}^{-2}\text{K}$                       (2)  $\text{MLT}^{-3}\text{K}^{-1}$                       (3)  $\text{MLT}^{-3}\text{K}$                       (4)  $\text{MLT}^{-2}\text{K}^{-2}$

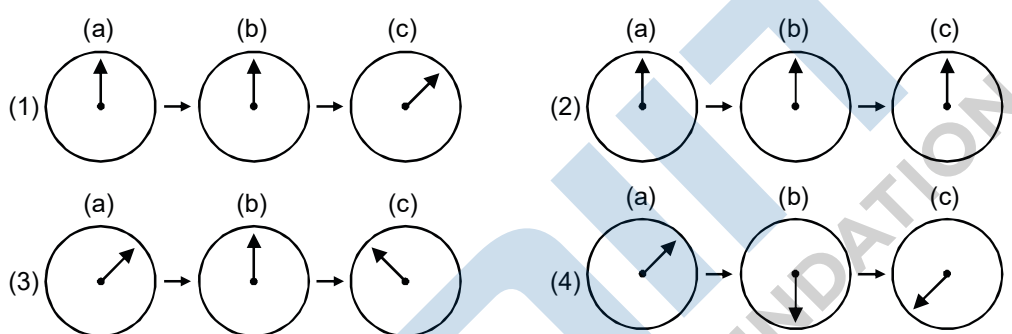
Ans. (2)

Sol.  $k = \frac{(Q/t)\Delta x}{A\Delta T}$   
 $= \frac{M^1L^2T^{-2}(L)}{L^2K(T)} = M^1L^1T^{-3}K^{-1}$

20. A small bar magnet is moves through a coil at constant speed from one end to the other. Which of the following series of observations will be seen on the galvanometer G attached across the coil ?



Three positions shown describe : (a) the magnet's entry (b) magnet is completely inside and (c) magnet's exit.



Ans. (3)

Sol. Theory Based

**SECTION – 2 : (Maximum Marks : 20)**

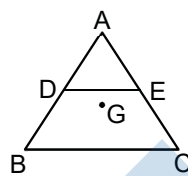
This section contains FIVE (05) questions. The answer to each question is **NUMERICAL VALUE** with two digit integer and decimal upto one digit.

If the numerical value has more than two decimal places truncate/round-off the value upto TWO decimal places.

**Full Marks : +4** If ONLY the correct option is chosen.

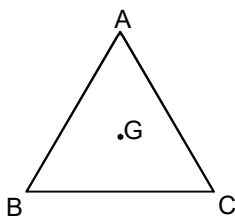
**Zero Marks : 0** In all other cases

21. ABC is a plane lamina of the shape of an equilateral triangle. D, E are mid-points of AB, AC and G is the centroid of the lamina. Moment of inertia of the lamina about a axis passing through G and perpendicular to the plane ABC is  $I_0$ . If part ADE is removed, the moment of inertia of the remaining part about the same axis is  $\frac{NI_0}{16}$  where N is an integer. Value of N is :



Ans. 11

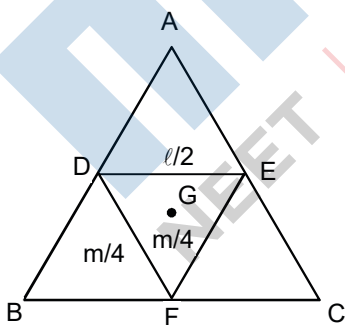
Sol.



Let mass of lamina = m, and length of side =  $\ell$ , then moment of inertia of lamina about an axis passing through G and perpendicular to the plane.

$$I_0 \propto m\ell^2$$

$$I_0 = km\ell^2$$



Let moment of inertia of DEF =  $I_1$  about G

$$\text{then, } I_1 \propto \left(\frac{m}{4}\right)\left(\frac{\ell}{2}\right)^2 \propto \frac{m\ell^2}{16}$$

$$I_1 = \frac{I_0}{16}$$

Let  $I_{ADE} = I_{BDF} = I_{EFC} = I_2$

then,  $3I_2 + I_1 = I_0$

$$3I_2 + \frac{I_0}{16} = I_0 \Rightarrow I_2 = \frac{5I_0}{16}$$

So, Moment of inertia of DECB =  $2I_2 + I_1 = 2\left(\frac{5I_0}{16}\right) + \left(\frac{I_0}{16}\right) = \frac{11I_0}{16}$

22. In a compound microscope, the magnified virtual image is formed at a distance of 25 cm from the eyepiece. The focal length of its objective lens is 1cm. If the magnification is 100 and the tube length of the microscope is 20 cm, then the focal length of the eye-piece lens (in cm) is \_\_\_\_\_

Ans. NTA answer is 5 and Reso answer is 6.25

Sol.  $M = \frac{v_0}{u_0} \left(1 + \frac{D}{f_e}\right)$

$$M = \frac{L}{f_0} \left(1 + \frac{D}{f_e}\right)$$

$$100 = \frac{20}{(1)} \left(1 + \frac{25}{f_e}\right); 5 = 1 + \frac{25}{f_e}$$

$$4 = \frac{25}{f_e}; f_e = \frac{25}{4} = 6.25 \text{ cm}$$

{It is not mentioned that the answer should be an integer so better answer should be 6.25}

23. A circular disc of mass M and radius R is rotating about its axis with angular speed  $\omega_1$ . If another stationary disc having radius  $\frac{R}{2}$  and same mass M is dropped co-axially on to the rotating disc.

Gradually both discs attain constant angular speed  $\omega_2$ . The energy lost in the process is p% of the initial energy. Value of p is \_\_\_\_\_

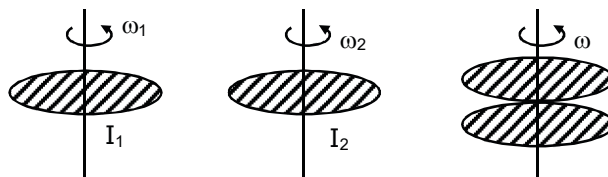
Ans. 20

Sol. Angular momentum conservation

$$I_1\omega_1 + I_2\omega_2 = (I_1 + I_2) \times \omega_f$$

$$\frac{MR^2}{2} \times \omega + 0 = \left(\frac{MR^2}{2} + \frac{MR^2}{8}\right) \omega_f$$

$$\omega_f = \frac{4}{5} \omega$$



Final K.E.,  $K_f = \frac{1}{2} \left(\frac{MR^2}{2} + \frac{MR^2}{8}\right) \frac{16}{25} \omega^2$

$$K_f = \frac{MR^2\omega^2}{5}; K_i = \frac{1}{2} \left(\frac{MR^2}{2}\right) \omega^2 = \frac{MR^2\omega^2}{4}$$

$$\text{Percentage loss in kinetic energy \% loss} = \frac{\frac{MR^2\omega^2}{4} - \frac{MR^2\omega^2}{5}}{\frac{MR^2\omega^2}{4}} \times 100 = 20\%$$

24. A closed vessel contains 0.1 mole of a monoatomic ideal gas at 200 K. If 0.05 mole of the same gas at 400 K is added to it, the final equilibrium temperature (in K) of the gas in the vessel will be close to \_\_\_\_\_

Ans. NTA answer is 266 and Reso answer is  $266.67 \approx 267$

Sol.  $(0.1)(200) + (0.05)(400) = (0.15)T$

$$T = \frac{20 + 20}{0.15} = \frac{800}{3} = 266.67$$

= 266.67 {It is not mentioned that answer should be in integer, so 266.67 will be better answer}

25. In the line spectra of hydrogen atom, difference between the largest and the shortest wavelengths of the Lyman series is 305 Å. The corresponding difference for the Paschen series in Å is : \_\_\_\_\_

Ans. NTA answer is 10553 and Reso answer is 10553.14

Sol. Lyman ;  $\frac{1}{\lambda_{\min}} = R(1) = R ; n = \infty \text{ to } 1$

$$\frac{1}{\lambda_{\min}} = R \left\{ 1 - \frac{1}{4} \right\} = \frac{3R}{4} ; n = 2 \text{ to } 1$$

$$\Rightarrow \lambda_{\max} - \lambda_{\min} = \frac{4}{3R} - \frac{1}{R}$$

$$304 = \frac{1}{3R} \quad \dots(a)$$

Paschen :  $Y_{\lambda_{\min}} = R \left( \frac{1}{9} \right)$  and  $Y_{\lambda_{\max}} = R \left( \frac{1}{9} - \frac{1}{16} \right) = \frac{7R}{16 \times 9}$

$$\lambda_{\max} - \lambda_{\min} = \frac{16 \times 9}{7R} - \frac{9}{R} = \frac{81}{7R} \quad \dots(b)$$

$$\frac{(b)}{(a)} = \frac{x}{3 \times 304} = \frac{81}{7} \Rightarrow x = 10553.14$$

{It is not mentioned that the answer should be an integer so better answer should be 10553.14}

## PART-B : CHEMISTRY

## SECTION – 1 : (Maximum Marks : 80)

## Single Choice Type

This section contains 20 Single choice questions. Each question has 4 choices (1), (2), (3) and (4) for its answer, out of which Only One is correct.

**Full Marks : +4** If ONLY the correct option is chosen.

**Negative Marks : -1 (minus one) mark** will be deducted for indicating incorrect response.

**26.** The elements with atomic numbers 101 and 104 belong to, respectively :

- (1) Actinoids and Group 4 (2) Group 11 and Group 4  
(3) Group 6 and Actinoids (4) Actinoids and Group 6

**Ans.** (1)

**Sol.**  ${}_{89}\text{Ac} \longrightarrow {}_{103}\text{Lr}$

Belongs to actinoids series and they all belongs to 3<sup>rd</sup> group. So atomic no. 101 element is actinoids and atomic number 104 element belongs to 4<sup>th</sup> group.

**27.** The ionic radii of  $\text{O}^{2-}$ ,  $\text{F}^-$ ,  $\text{Na}^+$  and  $\text{Mg}^{2+}$  are in the order :

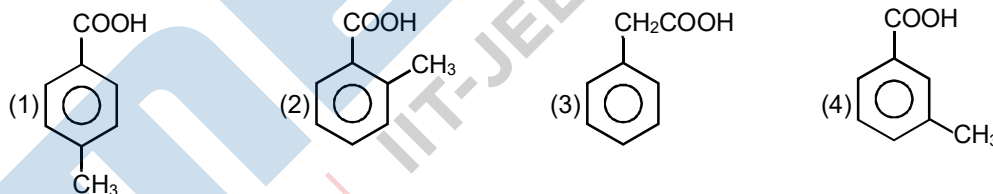
- (1)  $\text{O}^{2-} > \text{F}^- > \text{Na}^+ > \text{Mg}^{2+}$  (2)  $\text{F}^- > \text{O}^{2-} > \text{Na}^+ > \text{Mg}^{2+}$   
(3)  $\text{O}^{2-} > \text{F}^- > \text{Mg}^{2+} > \text{Na}^+$  (4)  $\text{Mg}^{2+} > \text{Na}^+ > \text{F}^- > \text{O}^{2-}$

**Ans.** (1)

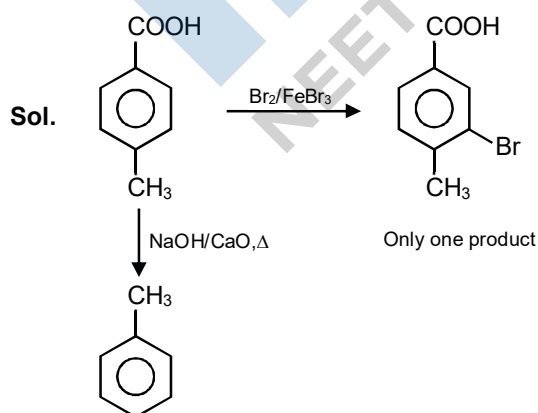
| Sol.         | $\text{O}^{2-}$ | $\text{F}^-$ | $\text{Na}^+$ | $\text{Mg}^{2+}$ |
|--------------|-----------------|--------------|---------------|------------------|
| Z            | 8               | 9            | 11            | 12               |
| No. of $e^-$ | 10              | 10           | 10            | 10               |

In isoelectronic species greater is Z smaller is radius so order is  $\text{O}^{2-} > \text{F}^- > \text{Na}^+ > \text{Mg}^{2+}$ .

**28.** [P] on treatment with  $\text{Br}_2/\text{FeBr}_3$  in  $\text{CCl}_4$  produced a single isomer  $\text{C}_8\text{H}_7\text{O}_2\text{Br}$  while heating [P] with sodalime gas toluene. The compound [P] is :



**Ans.** (1)



29. For one mol of an ideal gas, which of these statements must be true ?

- (a) U and H each depends only on temperature
- (b) Compressibility factor z is not equal to 1
- (c)  $C_{P,m} - C_{V,m} = R$
- (d)  $dU = C_V dT$  for any process

- (1) (b), (c) and (d)      (2) (a) and (c)      (3) (a), (c) and (d)      (4) (c) and (d)

Ans. (3)

Sol. (a) For ideal gas U and H are function of Temperature  $U = \frac{f}{2}nRT$

(c)  $C_P - C_V = R$

(d)  $\Delta U = C_V dT$  for all processes

30. Among statements (a) – (d), the correct ones are :

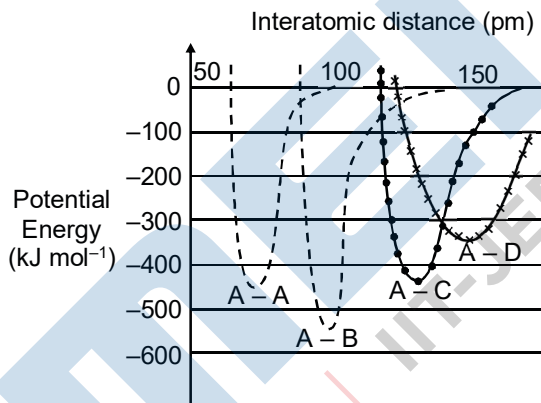
- (a) Lime stone is decomposed to CaO during the extraction of iron from its oxides.
- (b) In the extraction of silver, silver is extracted as an anionic complex.
- (c) Nickel is purified by Mond's process.
- (d) Zr and Ti are purified by Van Arkel method.

- (1) (c) and (d) only      (2) (a), (b), (c) and (d)      (3) (b), (c) and (d) only      (4) (a), (c) and (d) only

Ans. (2)

Sol. All statements are correct.

31. The intermolecular potential energy for the molecules A, B, C and D given below suggests that :

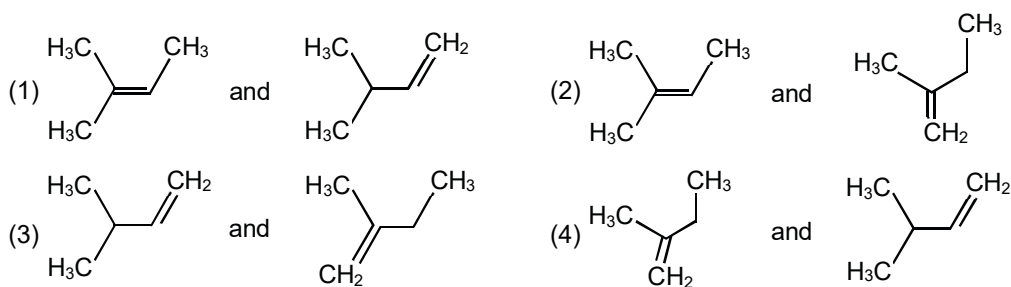


- (1) A-D has the shortest bond length
- (2) A-A has the largest bond enthalpy
- (3) D is more electronegative than other atoms.
- (4) A-B has the stiffest bond.

Ans. (4)

Sol. Bond enthalpy of AB bond is highest so A-B bond is more strong and B is highest electronegative atom.  
Order of bond length  $\Rightarrow A-A < A-B < A-C < A-D$

32. When neopentyl alcohol is heated with an acid, it slowly converted into an 85 : 15 mixture of alkenes A and B, respectively. What are these alkenes ?



Ans. (2)



33. The region in the electromagnetic spectrum where the Balmer series lines appear is :

- (1) Infrared (2) Microwave (3) Ultraviolet (4) Visible

Ans. (4)

Sol. In hydrogen spectrum maximum lines of Balmer series lies in visible region.

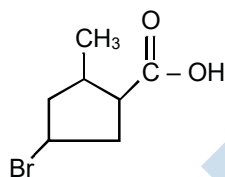
34. On combustion of Li, Na and K in excess of air, the major oxides formed, respectively, are :

- (1)  $\text{Li}_2\text{O}$ ,  $\text{Na}_2\text{O}$  and  $\text{K}_2\text{O}_2$  (2)  $\text{Li}_2\text{O}_2$ ,  $\text{Na}_2\text{O}_2$  and  $\text{K}_2\text{O}_2$   
 (3)  $\text{Li}_2\text{O}$ ,  $\text{Na}_2\text{O}_2$  and  $\text{K}_2\text{O}$  (4)  $\text{Li}_2\text{O}$ ,  $\text{Na}_2\text{O}_2$  and  $\text{KO}_2$

Ans. (4)

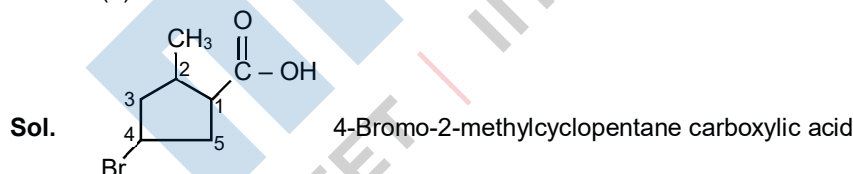
Sol. On heating in excess air Li form oxide sodium form peroxide while K, Rb, Cs form superoxide.

35. The IUPAC name of the following compound is :



- (1) 3-Bromo-5-methylcyclopentane (2) 3-Bromo-5-methylcyclopentanoic  
 (3) 5-Bromo-5-methylcyclopentanoic (4) 4-Bromo-2-methylcyclopentane carboxylic acid

Ans. (4)

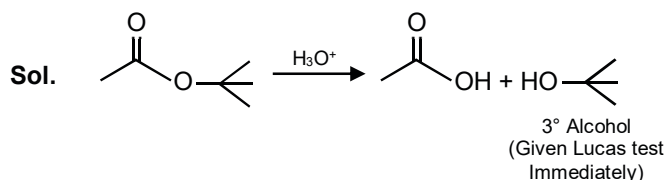


36. An organic compound (A) (molecular formula  $\text{C}_6\text{H}_{12}\text{O}_2$ ) was hydrolysed with dil.  $\text{H}_2\text{SO}_4$  to give a carboxylic acid (B) and an alcohol (C). 'C' gives white turbidity immediately when treated with anhydrous  $\text{ZnCl}_2$  and conc.  $\text{HCl}$ . The organic compound (A) is :





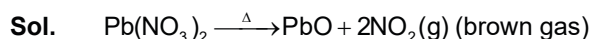
Ans. (1)



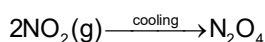
37. On heating, lead (II) nitrate gives a brown gas (A). The gas (A) on cooling changes to a colourless solid/liquid (B). (B) on heating with NO changes to blue solid (C). The oxidation number of nitrogen in solid (C) is :

- (1) +5                                      (2) +3                                      (3) +4                                      (4) +2

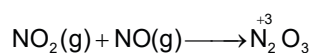
Ans. (2)



'B'

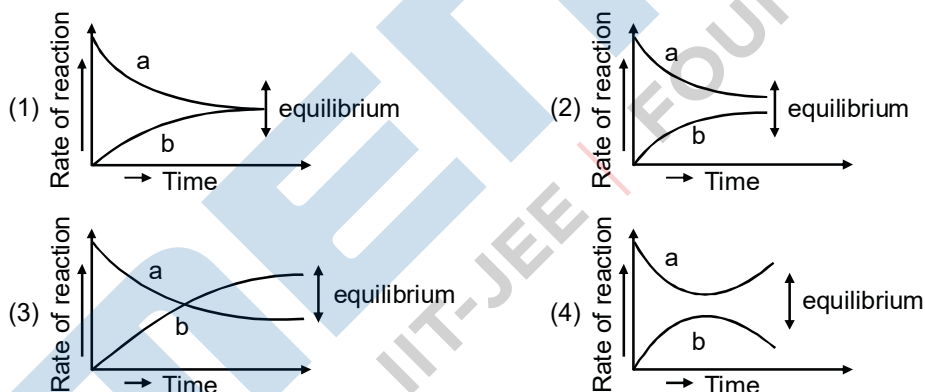


'B'                                      'C'



'D'

38. For the equilibrium  $A \rightleftharpoons B$ , the variation of the rate of the forward (a) and reverse (b) reaction with time is given by :



Ans. (1)

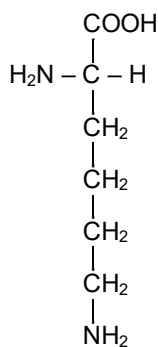
Sol. At equilibrium, rate of forward reaction = Rate of backward reaction.

39. Which of the following will react with  $CHCl_3 + \text{alc. KOH}$  ?

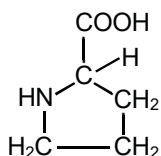
- (1) Adenine and lysine                                      (2) Adenine and thymine  
(3) Adenine and proline                                      (4) Thymine and proline

Ans. (1)

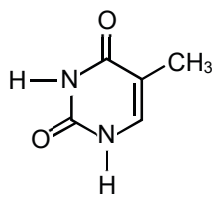
Sol. Compounds having  $1^\circ$  amine give carbylamine reaction with  $CHCl_3$  & alc. KOH



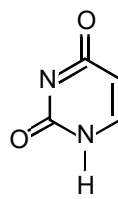
\* Lysine



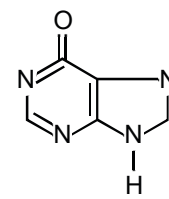
Proline



Thymine (T)



Cytosine (C)



Adenine (A)

40. The number of isomers possible for  $[\text{Pt}(\text{en})(\text{NO}_2)_2]$  is :

(1) 1

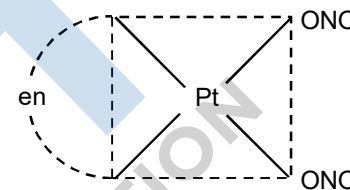
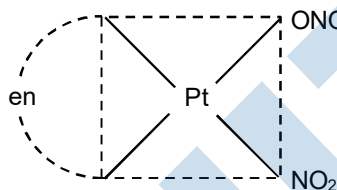
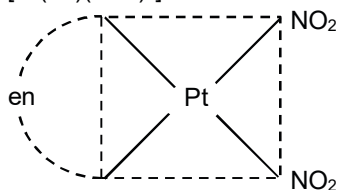
(2) 2

(3) 3

(4) 4

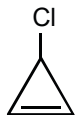
Ans. (3)

Sol.  $[\text{Pt}(\text{en})(\text{NO}_2)_2]$

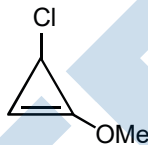


So, total possible isomers are 3.

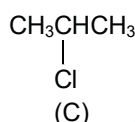
41. The decreasing order of reactivity of the following organic molecules towards  $\text{AgNO}_3$  solution is :



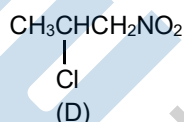
(A)



(B)



(C)



(D)

(1) (C) > (D) > (A) > (B)

(2) (A) > (B) > (C) > (D)

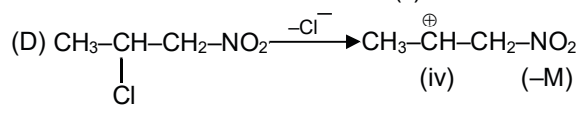
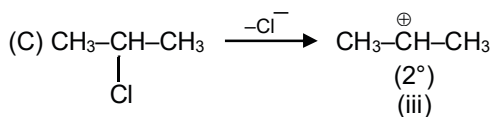
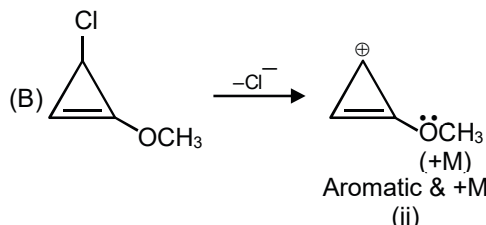
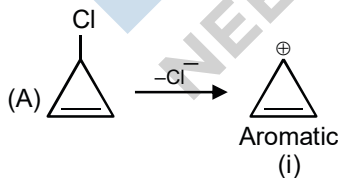
(3) (B) > (A) > (C) > (D)

(4) (A) > (B) > (D) > (C)

Ans. (3)

Sol. Given reaction is  $\text{S}_{\text{N}}1$  reaction. In  $\text{S}_{\text{N}}1$  reaction

$$\text{Rate of reaction} \propto \text{Stability of } \text{C}^+$$



Stability of  $C^+$  : ii > i > iii > iv

Reactivity order : B > A > C > D

42. Match the following :

- (i) Foam (a) smoke
- (ii) Gel (b) cell fluid
- (iii) Aerosol (c) jellies
- (iv) Emulsion (d) rubber
- (e) froth
- (f) milk

- (1) (i) – (d), (ii) – (b), (iii) – (a), (iv) – (e)      (2) (i) – (e), (ii) – (c), (iii) – (a), (iv) – (f)
- (3) (i) – (d), (ii) – (b), (iii) – (e), (iv) – (f)      (4) (i) – (b), (ii) – (c), (iii) – (e), (iv) – (d)

Ans. (2)

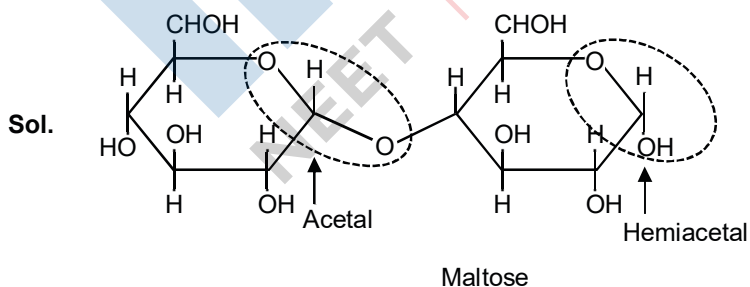
Sol. From NCERT [Surface chemistry]

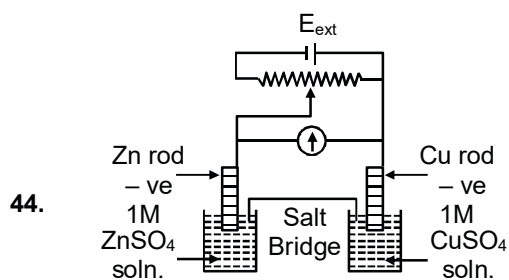
| Dispersed phase | Dispersion phase | Type of colloid | Examples                             |
|-----------------|------------------|-----------------|--------------------------------------|
| Solid           | Solid            | Solid sol       | Some coloured glasses and gem stones |
| Solid           | Liquid           | Sol             | Paints, cell fluids                  |
| Solid           | Gas              | Aerosol         | Smoke, dust                          |
| Liquid          | Solid            | Gel             | Cheese, butter, jellies              |
| Liquid          | Liquid           | Emulsion        | Milk, hair cream                     |
| Liquid          | Gas              | Aerosol         | Fog, mist, cloud, insecticide sprays |
| Gas             | Solid            | Solid sol       | Pumice stone, foam rubber            |
| Gas             | Liquid           | Foam            | Froth, whipped cream, soap lather    |

43. What are the functional groups present in the structure of maltose ?

- (1) Two acetals      (2) One acetal and one ketal
- (3) One ketal and one hemiketal      (4) One acetal and one hemiacetal

Ans. (4)





$$E_{\text{Cu}^{2+}/\text{Cu}}^0 = +0.34 \text{ V}$$

$$E_{\text{Zn}^{2+}/\text{Zn}}^0 = -0.76 \text{ V}$$

Identify the incorrect statement from the options below for the above cell :

- (1) If  $E_{\text{ext}} = 1.1 \text{ V}$ , no flow of  $e^-$  or current occurs
- (2) If  $E_{\text{ext}} < 1.1 \text{ V}$ , Zn dissolves at anode and Cu deposits at cathode
- (3) If  $E_{\text{ext}} > 1.1 \text{ V}$ ,  $e^-$  flow from Cu to Zn
- (4) If  $E_{\text{ext}} > 1.1 \text{ V}$ , Zn dissolves at Zn electrode and Cu deposits at Cu electrode

Ans. (4)

Sol. 
$$E_{\text{cell}}^0 = E_{\text{Cu}^{2+}/\text{Cu}}^0 - E_{\text{Zn}^{2+}/\text{Zn}}^0 = 1.1 \text{ V}$$

so If  $E = 1.1 \text{ V}$  no electron will flow

At  $E > 1.1 \text{ V}$  cell act as electrolytic cell and electron will flow from Cu to Zn.

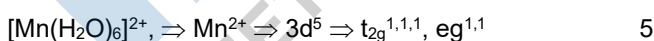
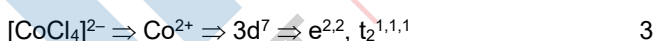
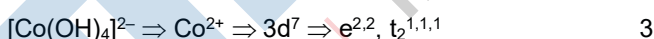
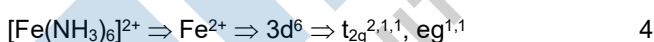


At  $E < 1.1 \text{ V}$  cell act as electrochemical cell so Zn dissolve and Cu deposit.

45. The pair in which both the species have the same magnetic moment (spin only) is :

- (1)  $[\text{Cr}(\text{H}_2\text{O})_6]^{2+}$  and  $[\text{Fe}(\text{H}_2\text{O})_6]^{2+}$
- (2)  $[\text{Co}(\text{OH})_4]^{2-}$  and  $[\text{Fe}(\text{NH}_3)_6]^{2+}$
- (3)  $[\text{Cr}(\text{H}_2\text{O})_6]^{2+}$  and  $[\text{CoCl}_4]^{2-}$
- (4)  $[\text{Mn}(\text{H}_2\text{O})_6]^{2+}$  and  $[\text{Cr}(\text{H}_2\text{O})_6]^{2+}$

Ans. (1)

Sol. No. of unpaired  $e^-$



So  $[\text{Cr}(\text{H}_2\text{O})_6]^{2+}$  and  $[\text{Fe}(\text{H}_2\text{O})_6]^{2+}$  have same magnetic moment (spin only)

**SECTION – 2 : (Maximum Marks : 20)**

This section contains FIVE (05) questions. The answer to each question is **NUMERICAL VALUE** with two digit integer and decimal upto one digit.

If the numerical value has more than two decimal places truncate/round-off the value upto TWO decimal places.

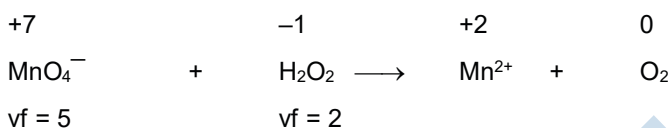
**Full Marks : +4** If ONLY the correct option is chosen.

**Zero Marks : 0** In all other cases

- 46.** A 20.0 mL solution containing 0.2 g impure H<sub>2</sub>O<sub>2</sub> reacts completely with 0.316 g of KMnO<sub>4</sub> in acid solution. The purity of H<sub>2</sub>O<sub>2</sub> (in %) is ..... (mol. wt. of H<sub>2</sub>O<sub>2</sub> = 34; mol. wt. of KMnO<sub>4</sub> = 158)

**Ans.** (85)

**Sol.** Let mass of pure H<sub>2</sub>O<sub>2</sub> is x gram



Eq. of H<sub>2</sub>O<sub>2</sub> = Eq. of MnO<sub>4</sub><sup>-</sup>

$$\left[\frac{x}{34}\right]2 = \left[\frac{0.316}{158}\right]5$$

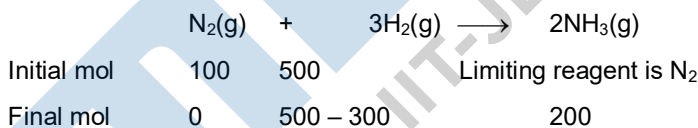
$$x = 0.17$$

$$\text{So, \% purity of H}_2\text{O}_2 \text{ solution} = \frac{0.17}{0.2} \times 100 = 85\%$$

- 47.** The mass of ammonia in grams produced when 2.8 kg of dinitrogen quantitatively reacts with 1 kg of dihydrogen is .....

**Ans.** (3400)

**Sol.** Mol of N<sub>2</sub> =  $\frac{2800}{28} = 100$  & Mol of H<sub>2</sub> =  $\frac{1000}{2} = 500$



Mass of NH<sub>3</sub> formed = 200 × 17 = 3400 gram

- 48.** If 75% of a first order reaction was completed in 90 minutes, 60% of the same reaction would be completed in approximately (in minutes) .....

(Take : log 2 = 0.30 ; log 2.5 = 0.40)

**Ans.** (60)

$$\text{Sol. } T = \frac{2.303}{K} \log \left[ \frac{100}{100 - x\%} \right]$$

$$T_{75\%} = \frac{2.303}{K} \log \left[ \frac{100}{25} \right] = 90$$

$$T_{60\%} = \frac{2.303}{K} \log \left[ \frac{100}{40} \right]$$

$$\frac{T_{75\%}}{T_{60\%}} = \frac{2 \log 2}{\log 2.5} \Rightarrow \frac{90}{T_{60\%}} = \frac{2 \times 0.3}{0.4}$$

$$T_{60\%} = \frac{90 \times 4}{6} = 60 \text{ min.}$$

49. At 300 K, the vapour pressure of a solution containing 1 mol of n-hexane and 3 moles of n-heptane is 550 mm of Hg. At the same temperature, if one more mol of n-heptane is added to this solution, the vapour pressure of the solution increases by 10 mm of Hg. What is the vapour pressure in mmHg of heptane in its pure state .....

Ans. (600)

Sol.  $P_{\text{total}} = P^{\circ}_{\text{hexane}} \cdot X_{\text{hexane}} + P^{\circ}_{\text{heptane}} \cdot X_{\text{heptane}}$

$$550 = [P^{\circ}_{\text{hexane}}] \times \frac{1}{4} + [P^{\circ}_{\text{heptane}}] \times \frac{3}{4} \quad \dots(i)$$

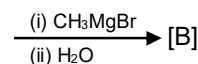
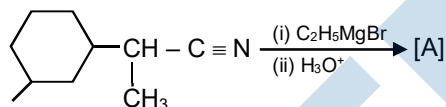
After mixing 1 mol n-heptane

$$560 = [P^{\circ}_{\text{hexane}}] \times \frac{1}{5} + [P^{\circ}_{\text{heptane}}] \times \frac{4}{5} \quad \dots(ii)$$

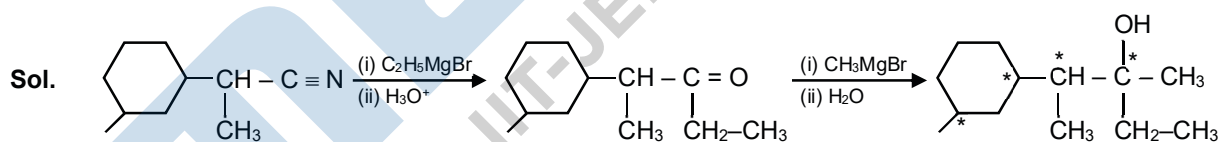
On solving eq. (i) and (ii)

$$P^{\circ}_{\text{heptane}} = 600 \text{ mm of Hg}$$

50. The number of chiral centres present in [B] is .....



Ans. (4)



### PART-C : MATHEMATICS

#### SECTION – 1 : (Maximum Marks : 80)

##### Single Choice Type

This section contains 20 Single choice questions. Each question has 4 choices (1), (2), (3) and (4) for its answer, out of which Only One is correct.

**Full Marks : +4** If ONLY the correct option is chosen.

**Negative Marks : -1 (minus one) mark** will be deducted for indicating incorrect response.

51. Let  $y = y(x)$  be the solution of the differential equation,  $xy' - y = x^2(x \cos x + \sin x)$ ,  $x > 0$ . If  $y(\pi) = \pi$ , then

$y''\left(\frac{\pi}{2}\right) + y\left(\frac{\pi}{2}\right)$  is equal to :

- (1)  $1 + \frac{\pi}{2}$                       (2)  $1 + \frac{\pi}{2} + \frac{\pi^2}{4}$                       (3)  $2 + \frac{\pi}{2} + \frac{\pi^2}{4}$                       (4)  $2 + \frac{\pi}{2}$

Ans. (4)

Sol. Given  $x \frac{dy}{dx} - y = x^2(x \cos x + \sin x)$

$$\Rightarrow \frac{dy}{dx} - \frac{1}{x}y = x(x \cos x + \sin x) \quad \therefore \text{I.F.} = e^{\int -\frac{1}{x} dx} = e^{-\ln x} = \frac{1}{x}$$

$$\therefore \text{solution is } y \cdot \frac{1}{x} = \int \frac{1}{x} \cdot x(x \cos x + \sin x) dx + C$$

$$\frac{y}{x} = \int (x \cos x + \sin x) dx + C$$

$$\frac{y}{x} = x \sin x + C, \frac{\pi}{\pi} = 0 + C \Rightarrow C = 1$$

$$y = x^2 \sin x + x$$

$$\frac{dy}{dx} = x^2 \cos x + 2x \sin x + 1$$

$$\frac{d^2y}{dx^2} = -x^2 \sin x + 2x \cos x + 2x \cos x + 2 \sin x = -x^2 \sin x + 4x \cos x - 2 \sin x$$

$$\therefore y''\left(\frac{\pi}{2}\right) + y\left(\frac{\pi}{2}\right) = \left(-\frac{\pi^2}{4} + 4 \cdot 0 + 2\right) + \left(\frac{\pi^2}{4} \cdot 1 + \frac{\pi}{2}\right)$$

$$= -\frac{\pi^2}{4} + 2 + \frac{\pi^2}{4} + \frac{\pi}{2}$$

$$= \frac{\pi}{2} + 2$$

52. A triangle ABC lying in the first quadrant has two vertices as A(1, 2) and B(3, 1). If  $\angle BAC = 90^\circ$ , and  $\text{ar}(\Delta ABC) = 5\sqrt{5}$  sq. units, then the abscissa of the vertex C is :

- (1)  $1 + \sqrt{5}$                       (2)  $2 + \sqrt{5}$                       (3)  $1 + 2\sqrt{5}$                       (4)  $2\sqrt{5} - 1$

Ans. (3)

**Sol.**  $m_{AC} = \frac{\beta - 2}{\alpha - 1}$

$m_{AB} = \frac{2 - 1}{1 - 3} = -\frac{1}{2}$

$AB \perp AC \quad \therefore \frac{\beta - 2}{\alpha - 1} \left(-\frac{1}{2}\right) = -1$

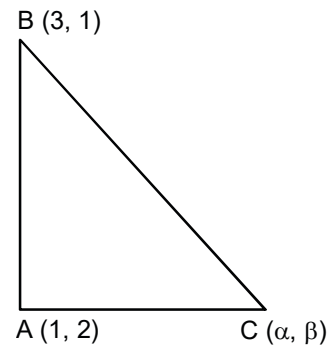
$\beta = 2\alpha - 2 + 2 \Rightarrow \beta = 2\alpha$

Now area of  $\triangle ABC = 5\sqrt{5} = \frac{1}{2} AB \cdot AC$

$\Rightarrow \frac{1}{2} \sqrt{(3-1)^2 + (1-2)^2} \cdot \sqrt{(\alpha-1)^2 + (\beta-2)^2} = 5\sqrt{5}$

$\Rightarrow \sqrt{(\alpha-1)^2 + (2\alpha-2)^2} = 10$

$\Rightarrow \sqrt{(\alpha-1)^2} \sqrt{5} = 10 \Rightarrow |\alpha-1| = 2\sqrt{5} \Rightarrow \alpha = 1 \pm 2\sqrt{5}$



**53.** Let  $f(x) = |x - 2|$  and  $g(x) = f(f(x))$ ,  $x \in [0, 4]$ . Then  $\int_0^3 (g(x) - f(x)) dx$  is equal to :

- (1) 0                                      (2)  $\frac{1}{2}$                                       (3)  $\frac{3}{2}$                                       (4) 1

**Ans.** (4)

**Sol.**  $f(x) = |x - 2| = \begin{cases} 2 - x & x < 2 \\ x - 2 & x \geq 2 \end{cases}$

$g(x) = f(f(x)) = \begin{cases} 2 - f(x) & f(x) < 2 \\ f(x) - 2 & f(x) \geq 2 \end{cases}$

$= \begin{cases} 2 - (2 - x) & 2 - x < 2 & x < 2 \\ (2 - x) - 2 & 2 - x \geq 2 & x < 2 \\ 2 - (x - 2) & x - 2 < 2 & x \geq 2 \\ (x - 2) - 2 & x - 2 \geq 2 & x \geq 2 \end{cases} = \begin{cases} x & 0 < x < 2 \\ -x & x \leq 0 \\ 4 - x & 2 \leq x < 4 \\ x - 4 & x \geq 4 \end{cases}$

$\int_0^3 (g(x) - f(x)) dx = \int_0^2 x dx + \int_2^3 (4 - x) dx - \int_0^3 |x - 2| dx = 1$

**54.** The integral  $\int \left( \frac{x}{x \sin x + \cos x} \right)^2 dx$  is equal to (where C is a constant of integration) :

- (1)  $\tan x + \frac{x \sec x}{x \sin x + \cos x} + C$                                       (2)  $\tan x - \frac{x \sec x}{x \sin x + \cos x} + C$   
 (3)  $\sec x + \frac{x \tan x}{x \sin x + \cos x} + C$                                       (4)  $\sec x - \frac{x \tan x}{x \sin x + \cos x} + C$

**Ans.** (2)

**Sol.**  $\int \frac{x^2}{(x \sin x + \cos x)^2} = \int \frac{x}{\cos x} \cdot \frac{x \cos x}{(x \sin x + \cos x)^2} dx$



$$= \frac{x}{\cos x} \int \frac{x \cos x}{(x \sin x + \cos x)^2} dx - \int \left[ \frac{d}{dx} (x \sec x) \int \frac{x \cos x}{(x \sin x + \cos x)^2} dx \right] dx$$

$$= \frac{x}{\cos x} \left( -\frac{1}{x \sin x + \cos x} \right) + \int \sec^2 x dx$$

$$\left( \because \int \frac{x \cos x}{(x \sin x + \cos x)^2} dx = \frac{-1}{x \sin x + \cos x} \quad \text{and} \right.$$

$$\left. \frac{d}{dx} (x \sec x) = \sec x + x \sec x \tan x = \sec x \left( 1 + \frac{x \sin x}{\cos x} \right) = \sec^2 x (x \sin x + \cos x) \right)$$

$$= \frac{-x}{\cos x (x \sin x + \cos x)} + \frac{\sin x}{\cos x} + C = \tan x - \frac{x \sec x}{x \sin x + \cos x} + C$$

55. If  $1 + (1 - 2^2.1) + (1 - 4^2.3) + (1 - 6^2.5) + \dots + (1 - 20^2.19) = \alpha - 220\beta$  then an ordered pair  $(\alpha, \beta)$  is equal to :

- (1) (11, 97)                      (2) (10, 103)                      (3) (11, 103)                      (4) (10, 97)

Ans. (3)

Sol.  $S = 1 + \sum_{r=1}^{10} 1 - (2r)^2(2r - 1) = 1 + 10 - \sum_{r=1}^{10} (8r^3 - 4r^2) = 11 - \left[ 8 \left( \frac{10 \times 11}{2} \right)^2 - 4 \left( \frac{10 \times 11 \times 21}{6} \right) \right]$

$$= 11 - [2(110)^2 - 140 \times 11]$$

$$= 11 - 22(1100 - 70)$$

$$= 11 - 220(110 - 7)$$

$$\therefore \alpha - 220\beta$$

$$= 11 - 220(103)$$

$$\therefore \alpha = 11, \beta = 103$$

$$(\alpha, \beta) = (11, 103)$$

56. A survey shows that 63% of the people in a city read newspaper A whereas 76% read news paper B. If x% of the people read both the newspapers, then a possible value of x can be :

- (1) 65                      (2) 55                      (3) 37                      (4) 29

Ans. (2)

Sol.  $n(A) = 63\%$

$$n(B) = 76\%$$

$$n(A \cap B) = x\%$$

Let  $n(\cup) = 100$

$$n(A) = 63, n(B) = 76, n(A \cap B) = x$$

$$n(A \cup B) = n(A) + n(B) - n(A \cap B) \leq 100$$

$$63 + 76 - x \leq 100$$

$$x \geq 39$$

but  $n(A \cap B) \leq n(A) \quad \therefore \quad 39 \leq x \leq 63$

57. Two vertical poles AB = 15 m and CD = 10 m are standing apart on a horizontal ground with points A and C on the ground. If P is the point of intersection of BC and AD, then the height of P (in m) above the line AC is :

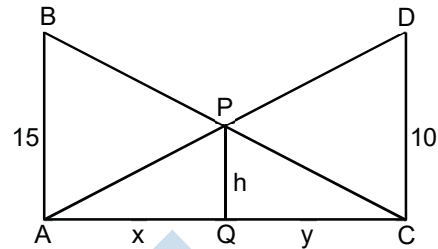
- (1) 10/3                      (2) 6                      (3) 5                      (4) 20/3

Ans. (2)

Sol.  $\Delta AQP \sim \Delta ACD \Rightarrow \frac{x}{h} = \frac{x+y}{10}$  .....(1)

$\therefore \Delta CQP \sim \Delta CAB \Rightarrow \frac{y}{h} = \frac{x+y}{15}$  .....(2)

(1) + (2)  $\rightarrow \frac{x+y}{h} = (x+y)\left(\frac{1}{10} + \frac{1}{15}\right) \Rightarrow h = 6$



58. Let P(3, 3) be a point on the hyperbola,  $\frac{x^2}{a^2} - \frac{y^2}{b^2} = 1$ . If the normal to it at P intersects the x-axis at (9,0) and e is its eccentricity, then the ordered pair (a<sup>2</sup>, e<sup>2</sup>) is equal to :

- (1)  $\left(\frac{9}{2}, 3\right)$                       (2)  $\left(\frac{3}{2}, 2\right)$                       (3) (9,3)                      (4)  $\left(\frac{9}{2}, 2\right)$

Ans. (1)

Sol. Hyperbola  $\frac{x^2}{a^2} - \frac{y^2}{b^2} = 1$

P(3,3) lies on hyperbola then  $\frac{1}{a^2} - \frac{1}{b^2} = \frac{1}{9}$  .....(1)

Normal at (3,3) is

$$\frac{a^2x}{3} + \frac{b^2y}{3} = a^2 + b^2$$

pass through (9,0)

$$3a^2 = a^2 + b^2 = 2a^2 = b^2$$

then  $\frac{1}{a^2} - \frac{1}{2a^2} = \frac{1}{9}$

$$2a^2 = 9 \Rightarrow a^2 = \frac{9}{2} \text{ and } b^2 = 9$$

$$e^2 = 1 + \frac{b^2}{a^2} = 1 + 2 = 3$$

59. Let [t] denote the greatest integer  $\leq t$ . Then the equation in x,  $[x]^2 + 2[x + 2] - 7 = 0$  has :

- (1) no integral solution                      (2) infinitely many solutions  
 (3) exactly two solutions                      (4) exactly four integral solutions

Ans. (2)

Sol.  $[x]^2 + 2[x + 2] - 7 = 0$

$$[x]^2 + 2([x] + 2) - 7 = 0$$

Let  $[x] = t$

$$t^2 + 2t - 3 = 0$$

$t = 1, -3$

$[x] = -3, 1$

$x \in [-3, -2) \cup [1, 2)$

Hence equation has infinitely many solutions.

60. If  $(a + \sqrt{2} b \cos x)(a - \sqrt{2} b \cos y) = a^2 - b^2$ , where  $a > b > 0$ , then  $\frac{dx}{dy}$  at  $(\frac{\pi}{4}, \frac{\pi}{4})$  is :

- (1)  $\frac{2a+b}{2a-b}$                       (2)  $\frac{a+b}{a-b}$                       (3)  $\frac{a-b}{a+b}$                       (4)  $\frac{a-2b}{a+2b}$

Ans. (2)

Sol.  $(a + \sqrt{2} b \cos x)(a - \sqrt{2} b \cos y) = a^2 - b^2$

$(a - \sqrt{2} b \cos y)(-\sqrt{2} b \sin x) \frac{dx}{dy} + \sqrt{2} b \sin y(a + \sqrt{2} b \cos x) = 0$

$\frac{dx}{dy} = \frac{\sqrt{2} b \sin y(a + \sqrt{2} b \cos x)}{\sqrt{2} b \sin x(a - \sqrt{2} b \cos y)} = \frac{\sin y(a + \sqrt{2} b \cos x)}{\sin x(a - \sqrt{2} b \cos y)}$

$\left. \frac{dx}{dy} \right|_{(\frac{\pi}{4}, \frac{\pi}{4})} = \frac{a+b}{a-b}$

61. Let  $x_0$  be the point of local maxima of  $f = \vec{a} \cdot (\vec{b} \times \vec{c})$ , where  $\vec{a} = x\hat{i} - 2\hat{j} + 3\hat{k}$ ,  $\vec{b} = -2\hat{i} + x\hat{j} - \hat{k}$  and  $\vec{c} = 7\hat{i} - 2\hat{j} + x\hat{k}$ . Then the value of  $\vec{a} \cdot \vec{b} + \vec{b} \cdot \vec{c} + \vec{c} \cdot \vec{a}$  at  $x = x_0$  is :

- (1) -22                      (2) 14                      (3) -4                      (4) -30

Ans. (1)

Sol.  $f(x) = [\vec{a} \vec{b} \vec{c}] = \begin{vmatrix} x & -2 & 3 \\ -2 & x & -1 \\ 7 & -2 & x \end{vmatrix} = x(x^2 - 2) + 2(-2x + 7) + 3(4 - 7x) = x^3 - 2x - 4x + 14 + 12 - 21x$

$f(x) = x^3 - 27x + 26$                        $\begin{matrix} + & - & + \\ & -3 & 3 \end{matrix}$

$f'(x) = 3x^2 - 27 = 3(x - 3)(x + 3)$

so local maxima point is  $x_0 = -3$

Now  $\vec{a} \cdot \vec{b} + \vec{b} \cdot \vec{c} + \vec{c} \cdot \vec{a} = -2x - 2x - 3 - 14 - 2x - x + 7x + 4 + 3x = 3x - 13$

at  $x = x_0 = -3$

$\vec{a} \cdot \vec{b} + \vec{b} \cdot \vec{c} + \vec{c} \cdot \vec{a} = -9 - 13 = -22$

62. Let  $f(x) = \int \frac{\sqrt{x}}{(1+x)^2} dx$  ( $x \geq 0$ ). Then  $f(3) - f(1)$  is equal to :

- (1)  $-\frac{\pi}{6} + \frac{1}{2} + \frac{\sqrt{3}}{4}$                       (2)  $-\frac{\pi}{12} + \frac{1}{2} + \frac{\sqrt{3}}{4}$                       (3)  $\frac{\pi}{12} + \frac{1}{2} - \frac{\sqrt{3}}{4}$                       (4)  $\frac{\pi}{6} + \frac{1}{2} - \frac{\sqrt{3}}{4}$

Ans. (3)

Sol.  $f(x) = \int \frac{\sqrt{x}}{(1+x)^2} dx$

Let  $x = \tan^2\theta$

$$dx = 2 \tan \theta \sec^2 \theta d\theta$$

$$f(x) = \int \frac{\tan \theta}{(1 + \tan^2 \theta)^2} \cdot 2 \tan \theta \sec^2 \theta d\theta$$

$$f(x) = \int \frac{\tan \theta}{\sec^4 \theta} \cdot 2 \tan \theta \sec^2 \theta d\theta$$

$$f(x) = \int 2 \tan^2 \theta \cos^2 \theta d\theta$$

$$f(x) = \int 2 \sin^2 \theta d\theta$$

$$f(x) = \int (1 - \cos 2\theta) d\theta$$

$$f(x) = \theta - \frac{\sin 2\theta}{2} + C = \theta - \frac{\tan \theta}{1 + \tan^2 \theta} + C$$

$$f(x) = \tan^{-1} \sqrt{x} - \frac{\sqrt{x}}{1+x} + C$$

$$\text{now } f(3) - f(1) = \tan^{-1} \sqrt{3} - \frac{\sqrt{3}}{1+3} - \tan^{-1} \sqrt{1} + \frac{1}{1+1}$$

$$= \frac{\pi}{3} - \frac{\pi}{4} + \frac{1}{2} - \frac{\sqrt{3}}{4} = \frac{\pi}{12} + \frac{1}{2} - \frac{\sqrt{3}}{4}$$

**63.** The mean and variance of 8 observations are 10 and 13.5, respectively. If 6 of these observations are 5, 7, 10, 12, 14, 15, then the absolute difference of the remaining two observations is :

- (1) 9                                      (2) 5                                      (3) 3                                      (4) 7

**Ans.** (4)

**Sol.** Let remaining two observations are a and b

$$\frac{5 + 7 + 12 + 10 + 15 + 14 + a + b}{8} = 10 \quad \Rightarrow 63 + a + b = 80 \Rightarrow a + b = 17 \quad \dots\dots\dots(1)$$

$$\sigma^2 = \frac{\sum X_i^2}{n} - \left( \frac{\sum X_i}{n} \right)^2$$

$$\Rightarrow 13.5 = \frac{25 + 49 + 144 + 100 + 225 + 196 + a^2 + b^2}{8} - 100$$

$$908 = a^2 + b^2 + 739$$

$$a^2 + b^2 = 169$$

$$(a + b)^2 - 2ab = 169$$

$$289 - 169 = 2ab \Rightarrow ab = 60$$

$$\therefore |a - b|^2 = (a + b)^2 - 4ab = 289 - 240 = 49$$

$$\therefore |a - b| = 7$$

**64.** Let  $\frac{x^2}{a^2} + \frac{y^2}{b^2} = 1$  ( $a > b$ ) be a given ellipse, length of whose latus rectum is 10. If its eccentricity is the

maximum value of the function  $\phi(t) = \frac{5}{12} + t - t^2$  then  $a^2 + b^2$  is equal to :

- (1) 145                                      (2) 126                                      (3) 116                                      (4) 135

Ans. (2)

Sol.  $L.R. = \frac{2b^2}{a} = 10 \Rightarrow b^2 = 5a$

$$\phi(t) = \frac{5}{12} - \left( t^2 - t + \frac{1}{4} - \frac{1}{4} \right) = \frac{5}{12} + \frac{1}{4} \left( t - \frac{1}{2} \right)^2$$

$$= \frac{2}{3} - \left( t - \frac{1}{2} \right)^2$$

$$\max \phi(t) = \frac{2}{3} = e$$

$$b^2 = a^2 (1 - e^2)$$

$$5a = a^2 \left( 1 - \frac{4}{9} \right) \Rightarrow 5 = \frac{5}{9}a \Rightarrow a^2 = 81, b^2 = 45$$

$$a^2 + b^2 = 126$$

65. Let  $f$  be a twice differentiable function on  $(1, 6)$ . If  $f(2) = 8, f'(2) = 5, f'(x) \geq 1$  and  $f''(x) \geq 4$ , for all  $x \in (1, 6)$ , then :

- (1)  $f(5) + f'(5) \geq 28$       (2)  $f(5) + f''(5) \leq 20$       (3)  $f(5) \leq 10$       (4)  $f(5) + f'(5) \leq 26$

Ans. (1)

Sol. Given  $f'(x) \geq 1 \Rightarrow \int_2^5 f'(x) dx \geq \int_2^5 1 dx$

$$\Rightarrow (f(x))_2^5 \geq (x)_2^5 \Rightarrow f(5) - f(2) \geq 3 \Rightarrow f(5) \geq 11 \dots\dots(1)$$

Now  $f''(x) \geq 4 \Rightarrow \int_2^5 f''(x) dx \geq \int_2^5 4 dx$

$$\Rightarrow (f'(x))_2^5 \geq (4x)_2^5$$

$$\Rightarrow f'(5) - f'(2) \geq 12$$

$$\Rightarrow f'(5) \geq 17 \dots\dots\dots (2)$$

$$(1) + (2) \Rightarrow f(5) + f'(5) \geq 28$$

66. Let  $u = \frac{2z+i}{z-ki}, z = x + iy$  and  $k > 0$ . If the curve represented by  $\text{Re}(u) + \text{Im}(u) = 1$  intersects the  $y$ -axis at points  $P$  and  $Q$  where  $PQ = 5$  then the value of  $k$  is

- (1)  $\frac{3}{2}$       (2)  $\frac{1}{2}$       (3) 4      (4) 2

Ans. (4)

Sol.  $u = \frac{2(x+iy)+i}{(x+iy)-ki} = \frac{2x+(2y+1)i}{x+(y-k)i} \times \frac{x-(y-k)i}{x-(y-k)i}$

$$\text{Real part of } u = \text{Re}(u) = \frac{2x^2 + (2y+1)(y-k)}{x^2 + (y-k)^2}$$

$$\text{Imaginary part of } u = \text{Im}(u) = \frac{x(2y+1) - 2x(y-k)}{x^2 + (y-k)^2}$$

Now  $\text{Re}(u) + \text{Im}(u) = 1$

$$\frac{2x^2 + (2y + 1)(y - k) + x(2y + 1) - 2x(y - k)}{x^2 + (y - k)^2} = 1$$

for y-axis put  $x = 0 \Rightarrow \frac{(2y + 1)(y - k)}{(y - k)^2} = 1$

$$\Rightarrow (2y + 1)(y - k) = (y - k)^2$$

$$\Rightarrow (y - k)(y + 1 + k) = 0$$

$$y = k, -(1 + k)$$

Now point  $P(0, k), Q(0, -(1 + k))$

$$PQ = |2k + 1| = 5$$

$$2k + 1 = \pm 5$$

$$2k = 4, -6$$

$$k = 2 - 3$$

hence  $k = 2 (k > 0)$

67. If  $A = \begin{bmatrix} \cos \theta & i \sin \theta \\ i \sin \theta & \cos \theta \end{bmatrix}, \left(\theta = \frac{\pi}{24}\right)$  and  $A^5 = \begin{bmatrix} a & b \\ c & d \end{bmatrix}$ , where  $i = \sqrt{-1}$ , then which one of the following is not true?

- (1)  $0 \leq a^2 + b^2 \leq 1$       (2)  $a^2 - d^2 = 0$       (3)  $a^2 - b^2 = \frac{1}{2}$       (4)  $a^2 - c^2 = 1$

Ans. (3)

Sol.  $A^2 = \begin{bmatrix} \cos \theta & i \sin \theta \\ i \sin \theta & \cos \theta \end{bmatrix} \begin{bmatrix} \cos \theta & i \sin \theta \\ i \sin \theta & \cos \theta \end{bmatrix} = \begin{bmatrix} \cos^2 \theta - \sin^2 \theta & 2i \sin \theta \cos \theta \\ 2i \sin \theta \cos \theta & \cos^2 \theta - \sin^2 \theta \end{bmatrix} = \begin{bmatrix} \cos 2\theta & i \sin 2\theta \\ i \sin 2\theta & \cos 2\theta \end{bmatrix}$

$$A^3 = \begin{bmatrix} \cos 2\theta & i \sin 2\theta \\ i \sin 2\theta & \cos 2\theta \end{bmatrix} \begin{bmatrix} \cos \theta & i \sin \theta \\ i \sin \theta & \cos \theta \end{bmatrix}$$

$$= \begin{bmatrix} \cos 3\theta & i \sin 3\theta \\ i \sin 3\theta & \cos 3\theta \end{bmatrix}$$

$$A^5 = \begin{bmatrix} \cos 5\theta & i \sin 5\theta \\ i \sin 5\theta & \cos 5\theta \end{bmatrix} = \begin{bmatrix} a & b \\ c & d \end{bmatrix}$$

$$a = \cos 5\theta, b = i \sin 5\theta, c = i \sin 5\theta, d = \cos 5\theta$$

$$a = d, b = c$$

(1)  $a^2 + b^2 = \cos^2 5\theta - \sin^2 5\theta = \cos 10\theta \in (0, 1)$  as  $\theta = \frac{\pi}{24}$

(2)  $a^2 - d^2 = 0$

(3)  $a^2 - b^2 = \cos^2 5\theta + \sin^2 5\theta = 1$

(4)  $a^2 - c^2 = a^2 - b^2 = 1$

68. Let  $\alpha$  and  $\beta$  be the roots of  $x^2 - 3x + p = 0$  and  $\gamma$  and  $\delta$  be the roots of  $x^2 - 6x + q = 0$ . If  $\alpha, \beta, \gamma, \delta$  form a geometric progression. Then ratio  $(2q + p) : (2q - p)$  is

- (1) 3 : 1      (2) 5 : 3      (3) 9 : 7      (4) 33 : 31

**Ans.** (3)

**Sol.**  $\alpha = a, \beta = ar, \gamma = ar^2, \delta = ar^3$

$$\alpha + \beta = 3 \Rightarrow a + ar = 3 \dots\dots\dots(1)$$

$$\gamma + \delta = 6 \Rightarrow ar^2 + ar^3 = 6 \dots\dots\dots(2)$$

By (1) and (2)  $\frac{ar^2(1+r)}{a(1+r)} = \frac{6}{3} \Rightarrow r^2 = 2$

$$\therefore \frac{2q+p}{2q-p} = \frac{2\gamma\delta + \alpha\beta}{2\gamma\delta - \alpha\beta} = \frac{2a^2r^5 + a^2r}{2a^2r^5 - a^2r} = \frac{2r^4 + 1}{2r^4 - 1} = \frac{8+1}{8-1} = \frac{9}{7}$$

**69.** The value of  $\sum_{r=0}^{20} {}^{50-r}C_6$  is equal to :

- (1)  ${}^{51}C_7 - {}^{30}C_7$                       (2)  ${}^{51}C_7 + {}^{30}C_7$                       (3)  ${}^{50}C_7 - {}^{30}C_7$                       (4)  ${}^{50}C_6 - {}^{30}C_6$

**Ans.** (1)

**Sol.**  $\sum_{r=0}^{20} {}^{50-r}C_6 =$   
 $= {}^{50}C_6 + {}^{49}C_6 + {}^{48}C_6 + \dots\dots\dots + {}^{30}C_6 = -{}^{30}C_7 + {}^{30}C_7 + {}^{30}C_6 + {}^{31}C_6 + {}^{32}C_6 + \dots\dots\dots + {}^{50}C_6$   
 $= -{}^{30}C_7 + {}^{31}C_7 + {}^{31}C_6 + {}^{32}C_6 + \dots\dots\dots + {}^{50}C_6$   
 $= -{}^{30}C_7 + {}^{32}C_7 + {}^{32}C_6 + \dots\dots\dots + {}^{50}C_6$   
 $= -{}^{30}C_7 + {}^{51}C_7 = {}^{51}C_7 - {}^{30}C_7$

**70.** Given the following two statements :

(S<sub>1</sub>) :  $(q \vee p) \rightarrow (p \leftrightarrow \sim q)$  is a tautology.

(S<sub>2</sub>) :  $\sim q \wedge (\sim p \leftrightarrow q)$  is a fallacy. Then :

- (1) only (S<sub>2</sub>) is correct.                      (2) both (S<sub>1</sub>) and (S<sub>2</sub>) are not correct.  
 (3) both (S<sub>1</sub>) and (S<sub>2</sub>) are correct.                      (4) only (S<sub>1</sub>) is correct.

**Ans.** (2)

**Sol.**

| p | q | $\sim p$ | $\sim q$ | $q \vee p$ | $p \leftrightarrow \sim q$ | S <sub>1</sub> : $(q \vee p) \rightarrow (p \leftrightarrow \sim q)$ | $\sim p \leftrightarrow q$ | S <sub>2</sub> : $\sim q \wedge (\sim p \leftrightarrow q)$ |
|---|---|----------|----------|------------|----------------------------|--|----------------------------|---|
| T | T | F        | F        | T          | F                          | F  | F                          | F   |
| T | F | F        | T        | T          | T                          | T  | T                          | T   |
| F | T | T        | F        | T          | T                          | T  | T                          | F   |
| F | F | T        | T        | F          | F                          | T  | F                          | F   |

so both (S<sub>1</sub>) and (S<sub>2</sub>) are not correct.

**SECTION – 2 : (Maximum Marks : 20)**

This section contains FIVE (05) questions. The answer to each question is **NUMERICAL VALUE** with two digit integer and decimal upto one digit.

If the numerical value has more than two decimal places truncate/round-off the value upto TWO decimal places.

**Full Marks : +4** If ONLY the correct option is chosen.

**Zero Marks : 0** In all other cases

71. If the equation of a plane P, passing through the intersection of the planes,  $x + 4y - z + 7 = 0$  and  $3x + y + 5z = 8$  is  $ax + by + 6z = 15$  for some  $a, b \in \mathbb{R}$ , then the distance of the point  $(3, 2, -1)$  from the plane P is .....

**Ans.** 3

**Sol.** Equation of plane of passing through intersection of planes  $x + 4y - z + 7 = 0$  .....(1)

and  $3x + y + 5z - 8 = 0$  .....(2)

is  $P_1 + \lambda P_2 = 0$

$(x + 4y - z + 7) + \lambda(3x + y + 5z - 8) = 0$

$(3\lambda + 1)x + (\lambda + 4)y + (5\lambda - 1)z + (7 - 8\lambda) = 0$  .....(3)

$ax + by + 6z - 15 = 0$  .....(4)

comparing (3) and (4)

$$\frac{a}{3\lambda + 1} = \frac{b}{\lambda + 4} = \frac{6}{5\lambda - 1} = \frac{-15}{7 - 8\lambda}$$

$$\therefore 42 - 48\lambda = -75\lambda + 15$$

$$27\lambda = -27$$

$$\lambda = -1$$

$$\therefore \frac{a}{-2} = \frac{b}{3} = -1 \Rightarrow a = 2, b = -3$$

so plane is  $2x - 3y + 6z - 15 = 0$ .....(5)

$$\text{distance of plane (5) from point } (3, 2, -1) \text{ is } p = \frac{|6 - 6 - 6 - 15|}{\sqrt{4 + 9 + 36}} = \left| -\frac{21}{\sqrt{49}} \right| = \left| -\frac{21}{7} \right| = 3$$

72. Suppose a differentiable function  $f(x)$  satisfies the identity  $f(x + y) = f(x) + f(y) + xy^2 + x^2y$ , for all real  $x$  and  $y$ . If  $\lim_{x \rightarrow 0} \frac{f(x)}{x} = 1$ , then  $f'(3)$  is equal to :

**Ans.** 10

**Sol.**  $f(x + y) = f(x) + f(y) + xy^2 + x^2y$

$f'(x + y) = f'(x) + 0 + y^2 + 2xy$

put  $y = -x$

$f'(0) = f'(x) + x^2 - 2x^2$

$1 = f'(x) - x^2$

$f'(x) = 1 + x^2$

$f'(3) = 10$



73. The probability of a man hitting a target is  $\frac{1}{10}$ . The least number of shots required, so that the probability of his hitting the target at least once is greater than  $\frac{1}{4}$ , is....

Ans. 3

Sol.  $p = \frac{1}{10}, q = \frac{9}{10}$

$$P(\text{not hitting in } n \text{ trials}) = \left(\frac{9}{10}\right)^n$$

$$\therefore P(\text{at least one hit}) = 1 - \left(\frac{9}{10}\right)^n > \frac{1}{4}$$

$$\Rightarrow \left(\frac{9}{10}\right)^n < \frac{3}{4}$$

$$(0.9)^n < 0.75$$

$$n = 3 \Rightarrow 0.729 < 0.75 \text{ which is true}$$

74. Let  $(2x^2 + 3x + 4)^{10} = \sum_{r=0}^{20} a_r x^r$ . Then  $\frac{a_7}{a_{13}}$  is equal to .....

Ans. 8

Sol. General term =  $\frac{10!}{r_1! r_2! r_3!} (2x^2)^{r_1} \cdot (3x)^{r_2} (4)^{r_3}$

$$a_7 = \frac{10! \cdot 2^3 \cdot 3 \cdot 4^6}{3!1!6!} + \frac{10! \cdot 2^2 \cdot 3^3 \cdot 4^5}{2!3!5!} + \frac{10! \cdot 2 \cdot 3^5 \cdot 4^4}{1!5!4!} + \frac{10! \cdot 3^7 \cdot 4^3}{7!3!}$$

$$a_{13} = \frac{10! \cdot 2^6 \cdot 3 \cdot 4^3}{6!1!3!} + \frac{10! \cdot 2^5 \cdot 3^3 \cdot 4^2}{5!3!2!} + \frac{10! \cdot 2^4 \cdot 3^5 \cdot 4}{4!5!1!} + \frac{10! \cdot 2^2 \cdot 3^7 \cdot 4^0}{3!7!}$$

$$\frac{a_7}{a_{13}} = 2^3 \left[ \frac{\frac{10! \cdot 3 \cdot 2^{12}}{3!1!6!} + \frac{10! \cdot 3^3 \cdot 2^9}{2!3!5!} + \frac{10! \cdot 3^5 \cdot 2^6}{1!5!4!} + \frac{10! \cdot 3^7 \cdot 2^3}{7!3!}}{\frac{10! \cdot 3 \cdot 2^{12}}{3!1!6!} + \frac{10! \cdot 3^3 \cdot 2^9}{2!3!5!} + \frac{10! \cdot 3^5 \cdot 2^6}{1!5!4!} + \frac{10! \cdot 3^7 \cdot 2^3}{7!3!}} \right] = 2^3 = 8$$

75. If the system of equations

$$x - 2y + 3z = 9$$

$$2x + y + z = b$$

$$x - 7y + az = 24, \text{ has infinitely many solutions, then } a - b \text{ is equal to :}$$

Ans. 5

Sol. For infinitely many solutions  $D = D_1 = D_2 = D_3 = 0$

$$D = \begin{vmatrix} 1 & -2 & 3 \\ 2 & 1 & 1 \\ 1 & -7 & a \end{vmatrix} = 0 \Rightarrow 1(-2-3) + 7(1-6) + a(1+4) = 0$$

$$\Rightarrow -5 - 35 + 5a = 0 \Rightarrow a = 8$$

$$D_1 = \begin{vmatrix} 9 & -2 & 3 \\ b & 1 & 1 \\ 24 & -7 & a \end{vmatrix} = 0 \quad \Rightarrow \quad \begin{vmatrix} 9 & -2 & 3 \\ b & 1 & 1 \\ 24 & -7 & a \end{vmatrix} = 0$$

$$\Rightarrow -b(-16 + 21) + 1(72 - 72) - 1(-63 + 48) = 0$$

$$\Rightarrow -5b + 15 = 0$$

$$\Rightarrow b = 3$$

similarly  $D_2 = D_3 = 0$  for  $a = 8, b = 3$

$$\therefore a - b = 8 - 3 = 5$$

MENIIT  
NEET | IIT-JEE | FOUNDATION